

▲ TRUE-FALSE QUIZ ▲

Determine whether the statement is true or false. If it is true, explain why. If it is false, explain why or give an example that disproves the statement.

1. $\int_{-1}^2 \int_0^6 x^2 \sin(x - y) \, dx \, dy = \int_0^6 \int_{-1}^2 x^2 \sin(x - y) \, dy \, dx$
2. $\int_{-1}^1 \int_0^1 e^{x^2+y^2} \sin y \, dx \, dy = 0$
3. If D is the disk given by $x^2 + y^2 \leq 4$, then

$$\iint_D \sqrt{4 - x^2 - y^2} \, dA = \frac{16\pi}{3}$$

4. $\int_1^4 \int_0^1 (x^2 + \sqrt{y}) \sin(x^2 y^2) \, dx \, dy \leq 9$

5. The integral

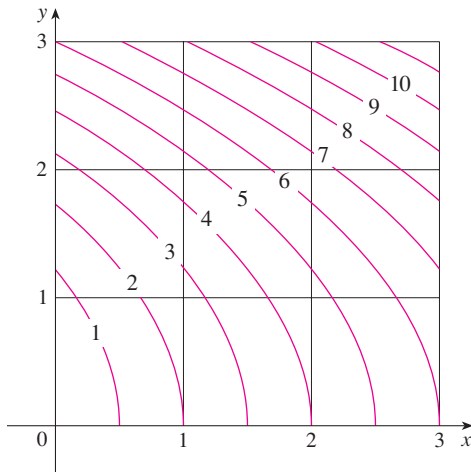
$$\int_0^{2\pi} \int_0^2 \int_r^2 dz \, dr \, d\theta$$

represents the volume enclosed by the cone $z = \sqrt{x^2 + y^2}$ and the plane $z = 2$.

6. The integral $\iiint_E kr^3 \, dz \, dr \, d\theta$ represents the moment of inertia about the z -axis of a solid E with constant density k .

◆ EXERCISES ◆

1. A contour map is shown for a function f on the square $R = [0, 3] \times [0, 3]$. Use a Riemann sum with nine terms to estimate the value of $\iint_R f(x, y) \, dA$. Take the sample points to be the upper right corners of the squares.

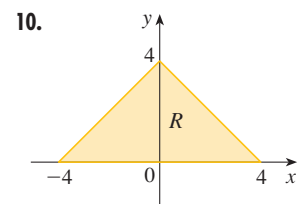
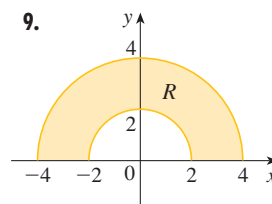


2. Use the Midpoint Rule to estimate the integral in Exercise 1.

3–8 ■ Calculate the iterated integral.

3. $\int_1^2 \int_0^2 (y + 2xe^y) \, dx \, dy$
4. $\int_0^1 \int_0^1 ye^{xy} \, dx \, dy$
5. $\int_0^1 \int_0^x \cos(x^2) \, dy \, dx$
6. $\int_0^1 \int_x^{e^x} 3xy^2 \, dy \, dx$
7. $\int_0^\pi \int_0^1 \int_0^{\sqrt{1-y^2}} y \sin x \, dz \, dy \, dx$
8. $\int_0^1 \int_{\sqrt{y}}^1 \int_0^y xy \, dz \, dx \, dy$

9–10 ■ Write $\iint_R f(x, y) \, dA$ as an iterated integral, where R is the region shown and f is an arbitrary continuous function on R .



11. Describe the region whose area is given by the integral

$$\int_0^\pi \int_1^{1+\sin \theta} r \, dr \, d\theta$$

12. Describe the solid whose volume is given by the integral

$$\int_0^{2\pi} \int_0^{\pi/6} \int_1^3 \rho^2 \sin \phi \, d\rho \, d\phi \, d\theta$$

and evaluate the integral.

13–14 ■ Calculate the iterated integral by first reversing the order of integration.

13. $\int_0^1 \int_x^1 e^{x/y} \, dy \, dx$ 14. $\int_0^1 \int_{y^2}^1 y \sin(x^2) \, dx \, dy$

15–28 ■ Calculate the value of the multiple integral.

15. $\iint_R \frac{1}{(x - y)^2} \, dA$, where $R = \{(x, y) \mid 0 \leq x \leq 1, 2 \leq y \leq 4\}$

16. $\iint_D x^3 \, dA$, where $D = \{(x, y) \mid -1 \leq x \leq 1, x^2 - 1 \leq y \leq x + 1\}$

- 17. $\iint_D xy \, dA$, where D is bounded by $y^2 = x^3$ and $y = x$
- 18. $\iint_D xe^y \, dA$, where D is bounded by $y = 0$, $y = x^2$, $x = 1$
- 19. $\iint_D (xy + 2x + 3y) \, dA$, where D is the region in the first quadrant bounded by $x = 1 - y^2$, $y = 0$, $x = 0$
- 20. $\iint_D y \, dA$, where D is the region in the first quadrant that lies above the hyperbola $xy = 1$ and the line $y = x$ and below the line $y = 2$
- 21. $\iint_D (x^2 + y^2)^{3/2} \, dA$, where D is the region in the first quadrant bounded by the lines $y = 0$ and $y = \sqrt{3}x$ and the circle $x^2 + y^2 = 9$
- 22. $\iint_D \sqrt{x^2 + y^2} \, dA$, where D is the closed disk with radius 1 and center $(0, 1)$
- 23. $\iiint_E x^2z \, dV$, where $E = \{(x, y, z) \mid 0 \leq x \leq 2, 0 \leq y \leq 2x, 0 \leq z \leq x\}$
- 24. $\iiint_T y \, dV$, where T is the tetrahedron bounded by the planes $x = 0$, $y = 0$, $z = 0$, and $2x + y + z = 2$
- 25. $\iiint_E y^2z^2 \, dV$, where E is bounded by the paraboloid $x = 1 - y^2 - z^2$ and the plane $x = 0$
- 26. $\iiint_E z \, dV$, where E is bounded by the planes $y = 0$, $z = 0$, $x + y = 2$ and the cylinder $y^2 + z^2 = 1$ in the first octant
- 27. $\iiint_E yz \, dV$, where E lies above the plane $z = 0$, below the plane $z = y$, and inside the cylinder $x^2 + y^2 = 4$
- 28. $\iiint_H z^3\sqrt{x^2 + y^2 + z^2} \, dV$, where H is the solid hemisphere with center the origin, radius 1, that lies above the xy -plane

29–34 ■ Find the volume of the given solid.

- 29. Under the paraboloid $z = x^2 + 4y^2$ and above the rectangle $R = [0, 2] \times [1, 4]$
 - 30. Under the surface $z = x^2y$ and above the triangle in the xy -plane with vertices $(1, 0)$, $(2, 1)$, and $(4, 0)$
 - 31. The solid tetrahedron with vertices $(0, 0, 0)$, $(0, 0, 1)$, $(0, 2, 0)$, and $(2, 2, 0)$
 - 32. Bounded by the cylinder $x^2 + y^2 = 4$ and the planes $z = 0$ and $y + z = 3$
 - 33. One of the wedges cut from the cylinder $x^2 + 9y^2 = a^2$ by the planes $z = 0$ and $z = mx$
 - 34. Above the paraboloid $z = x^2 + y^2$ and below the half-cone $z = \sqrt{x^2 + y^2}$
-
- 35. Consider a lamina that occupies the region D bounded by the parabola $x = 1 - y^2$ and the coordinate axes in the first quadrant with density function $\rho(x, y) = y$.
 - (a) Find the mass of the lamina.
 - (b) Find the center of mass.
 - (c) Find the moments of inertia about the x - and y -axes.

- 36. A lamina occupies the part of the disk $x^2 + y^2 \leq a^2$ that lies in the first quadrant.
 - (a) Find the centroid of the lamina.
 - (b) Find the center of mass of the lamina if the density function is $\rho(x, y) = xy^2$.
- 37. (a) Find the centroid of a right circular cone with height h and base radius a . (Place the cone so that its base is in the xy -plane with center the origin and its axis along the positive z -axis.)
 - (b) Find the moment of inertia of the cone about its axis (the z -axis).
- 38. (a) Set up, but don't evaluate, an integral for the surface area of the parametric surface given by the vector function $\mathbf{r}(u, v) = v^2 \mathbf{i} - uv \mathbf{j} + u^2 \mathbf{k}$, $0 \leq u \leq 3$, $-3 \leq v \leq 3$.
 - (b) Use a computer algebra system to approximate the surface area correct to four significant digits.
- 39. Find the area of the part of the surface $z = x^2 + y$ that lies above the triangle with vertices $(0, 0)$, $(1, 0)$, and $(0, 2)$.
- 40. Graph the surface $z = x \sin y$, $-3 \leq x \leq 3$, $-\pi \leq y \leq \pi$, and find its surface area correct to four decimal places.
- 41. Use polar coordinates to evaluate

$$\int_0^{\sqrt{2}} \int_y^{\sqrt{4-y^2}} \frac{1}{1+x^2+y^2} \, dx \, dy$$

- 42. Use spherical coordinates to evaluate

$$\int_0^1 \int_0^{\sqrt{1-x^2}} \int_0^{\sqrt{1-x^2-y^2}} (x^2 + y^2 + z^2)^2 \, dz \, dy \, dx$$

- 43. If D is the region bounded by the curves $y = 1 - x^2$ and $y = e^x$, find the approximate value of the integral $\iint_D y^2 \, dA$. (Use a graphing device to estimate the points of intersection of the curves.)
- 44. Find the center of mass of the solid tetrahedron with vertices $(0, 0, 0)$, $(1, 0, 0)$, $(0, 2, 0)$, $(0, 0, 3)$ and density function $\rho(x, y, z) = x^2 + y^2 + z^2$.
- 45. The joint density function for random variables X and Y is

$$f(x, y) = \begin{cases} C(x + y) & \text{if } 0 \leq x \leq 3, 0 \leq y \leq 2 \\ 0 & \text{otherwise} \end{cases}$$
 - (a) Find the value of the constant C .
 - (b) Find $P(X \leq 2, Y \geq 1)$.
 - (c) Find $P(X + Y \leq 1)$.
- 46. A lamp has three bulbs, each of a type with average lifetime 800 hours. If we model the probability of failure of the bulbs by an exponential density function with mean 800, find the probability that all three bulbs fail within a total of 1000 hours.

47. Rewrite the integral

$$\int_{-1}^1 \int_{x^2}^1 \int_0^{1-y} f(x, y, z) dz dy dx$$

as an iterated integral in the order $dx dy dz$.

48. Give five other iterated integrals that are equal to

$$\int_0^2 \int_0^{y^3} \int_0^{y^2} f(x, y, z) dz dx dy$$

49. Use the transformation $u = x - y$, $v = x + y$ to evaluate $\iint_R (x - y)/(x + y) dA$, where R is the square with vertices $(0, 2)$, $(1, 1)$, $(2, 2)$, and $(1, 3)$.
50. Use the transformation $x = u^2$, $y = v^2$, $z = w^2$ to find the volume of the region bounded by the surface $\sqrt{x} + \sqrt{y} + \sqrt{z} = 1$ and the coordinate planes.

51. Use the change of variables formula and an appropriate transformation to evaluate $\iint_R xy dA$, where R is the square with vertices $(0, 0)$, $(1, 1)$, $(2, 0)$, and $(1, -1)$.

52. (a) Evaluate $\iint_D \frac{1}{(x^2 + y^2)^{n/2}} dA$, where n is an integer and D is the region bounded by the circles with center the origin and radii r and R , $0 < r < R$.
- (b) For what values of n does the integral in part (a) have a limit as $r \rightarrow 0^+$?
- (c) Find $\iiint_E \frac{1}{(x^2 + y^2 + z^2)^{n/2}} dV$, where E is the region bounded by the spheres with center the origin and radii r and R , $0 < r < R$.
- (d) For what values of n does the integral in part (c) have a limit as $r \rightarrow 0^+$?